



GURUKUL INTERNATIONAL SCHOOL

JANJIR

A DAY CUM BOARDING SR. SEC. ENGLISH MEDIUM SCHOOL

RUN BY MARS EDUCATION SOCIETY - JANJIR

Affiliation No: 3330265 | School Code: 15094 | U-Dise No: 22061700909

We Love, We Share, With Care



**HAPPY SUMMER
HOLIDAYS**

ASSIGNMENT

2024-25

Class : 5

MATHS

Q.1 Write the smallest and greatest numbers using digits in each set and also arrange them in ascending order. Use all the digits and do not repeat any digit:

The diagram shows a row of ten circles containing the digits 0, 1, 2, 3, 4, 5, 6, 7, 8, and 9. Below these circles are four rectangular boxes. The first box is labeled 'Numbers' and is positioned under the circles 0 and 1. The second box is labeled 'Smallest' and is positioned under the circles 3, 4, and 5. The third box is labeled 'Greatest' and is positioned under the circles 6, 7, and 8. The fourth box is labeled 'Ascending order' and is positioned under the circles 9 and 0.

- a) 1,5,7,9 :
- b) 2,4,6,8 :
- c) 3,0,6,8 :

Q.2 Write the predecessor and successor of the following:

526456
587965
789654

Q.3 Write the following number names in standard form:

- a) Seventy-five lakh seven : _____
- b) Four crore three lakh six hundred twenty-one : _____
- c) Seventy-eight million ninety thousand forty-two : _____
- d) Ten crore fifty-one lakh twenty-one thousand one : _____

Q.4 Arrange in descending order:

- a) 3465456; 5454545; 6454574; 25454154
- b) 9455452; 2454545; 8454574; 92454154

Q.5 Write the greatest and the smallest numbers from given set of the numbers in each of the following:

Number	Greatest No.	Smallest No.
45632109, 87687619, 93675427		
35632107, 67687617, 43677427		
35632107, 37687617, 33677427		

Q.6 Form the smallest and the greatest numbers using the digits 5,6,7,3,0 and 9. Use all the digits and do not repeat any digit.

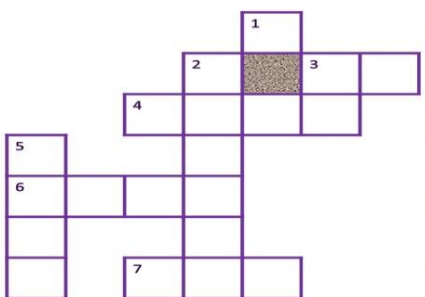
Q.7 Round off the following numbers:

Numbers	Nearest 10	Nearest 100	Nearest 1000
2412			
6215			
9910			

Q.8

I. Solve the Crossword Puzzle

(Hint: Record all your answer in Roman Numerals)



Across

3. $500 - 100 = \underline{\hspace{2cm}}$

4. $27 - 5 = \underline{\hspace{2cm}}$

6. $72 - 8 = \underline{\hspace{2cm}}$

7. $50 + 9 = \underline{\hspace{2cm}}$

Down

1. $66 - 16 = \underline{\hspace{2cm}}$

2. $31 + 6 = \underline{\hspace{2cm}}$

3. $50 + 51 = \underline{\hspace{2cm}}$

5. $40 + 2 = \underline{\hspace{2cm}}$

Q.9 Arrange in ascending order:

- a) 5465456, 5454545, 7454574, 45454154
 b) 6455452, 2454545, 8454574, 62454154

Q.10 Suryansh bought a plot for Rs. 70,68,420 and a car bought Rs. 6,00,000. what is the total cost he spend?

Q.11 In 2023 the population of Uttar Pradesh, Madhya Pradesh and Bihar was 23,15,02,578, 12,49,04,071 and 12,85,00,364. What was the total population of the three states?

Q.12 The greater number of two numbers is 96,58,358 and their sum is 1,00,00,568. Find the smaller number.

Computer

1. Imagine that we are going to live with robots in near future. Robots have become a part of our family and are helping us in our daily life. For ex. Doing our homework, cleaning our house etc. Write your views about it.

2. Activity-

Make a time-line of evolution of computers.

Or

Make a chart on early calculating devices.

3. Solve the crossword:





Q1. Read the following passage and answer the following:

Sardar Patel is known as the Iron Man of India and he was a great leader in the 20th century. He died almost 2 years after the death of Mahatma Gandhi. He was so emotional and kind-hearted person that when his followers were concerned, he also looked very disappointed.

Sardar Patel was the man who had no problem organizing the affairs because he had a very sharp mind. Additionally, he was very skilled to select the right person for the right posts. He was the Home Minister of India when India-Pakistan War took place in 1947. He died on 15 December 1950.

Tick the correct answers

I. Sardar Patel is known as

- (a) A great leader.
- (b) The Home Minister of India.
- (c) The Iron Man of India.
- (d) An old man.

II. He had a quality that was

- (a) Encouraging the people.
- (b) Selecting the right person for the right posts.
- (c) Loving the birds.
- (d) Doing great work.

III. When did he die?

- (a) 14 Dec 1949
- (b) 15 Dec 1946
- (c) 15 Dec 1950
- (d) 15 Jan 1950

IV. He was very disappointed when

- (a) His family faced difficulties.
- (b) He was alone.
- (c) His father was ill.
- (d) His followers were concerned.

V. He was

- (a) A soft-hearted man.
- (b) An angry man.
- (c) 56 years old.
- (d) None of the above.

SECTION B- GRAMMAR

Q2. Define sentence. Write its types.

Q3. Rearrange these jumbled sentences:

1. at /the /alone/ home/ was /boy
2. we /the /saw /behind/ curtain/ something moving
3. for /I /had /and /curd/ lunch /rice/
4. Rahul/ to /out/ to/ with/ his/ play/ friends /wants/ go
5. her /Monica /is /quite /happy /with/ results

SECTION C- LITERATURE

Q4. Answer the following questions:

- a) Who was Oliver and who adopted him?
- b) Who was Fagin?
- c) What is the moral of the story Oliver Finds a Home?
- d) Describe the character of Mr. Brownlow.
- e) What happened to the children after they had these ice golos?
- f) What is the mood of the poem Ice Golawala?

Q5. Write the word meanings of the following:

- | | |
|---------------|------------|
| a. Shrivelled | c. Obliged |
| b. Naka | d. Lurking |

Q6. Here are some pairs of homophones learn and byheart these words

- a. Ate / Eight
- b. Bare/ Bear
- c. Brake/ Break
- d. Flour/ Flower
- e. Hair / Hare
- f. Hear / Here
- g. Peace / Piece
- h. Sail / Sale
- i. Sea/ See
- j. Write / right

GENERAL KNOWLEDGE

1. Collect and write any 10 highlights of the year 2023.
2. Write the purpose of the establishment of UNO in 5 sentences.
3. Paste the pictures of five great mathematicians of India.

हिंदी

प्रश्न 1. भाषा एवं बोली में पाँच अंतर लिखिए ।

प्रश्न 2. भाषा सेतु से पाठ 1 के कठिन शब्दों के अर्थ लिखें एवं याद करें ।

प्रश्न 3. 5-5 अनुस्वार व अनुनासिक शब्द लिखिए ।

प्रश्न 4. " बढ़ता प्रदूषण " के विषय पर 1 पेज का निबंध लिखिए ।

प्रश्न 5. भारत के संविधान में कितनी भाषाओं को मान्यता दी गई है? उनकी संख्या तथा उनके नाम लिखिए ।

प्रश्न 6. दिए गए चित्र को देख कर एक कहानी लिखिए ।



SCIENCE



General Instructions:-

1. The assignment must be done in a very neat and presentable manner.
2. Every work of the child will be assessed on the basis of the presentation, neatness, completion of all the given questions and timely submission.
3. Assignments to be done in science H.W copy only.

1. Answer the following.

(Chapter: - 1 Food and Health)

1. Make a balanced diet chart for lunch.

List the food items (dishes) that you like to eat for lunch.

List the ingredient used in the food items (dishes) of each meal and mention their nutrient types.

2. Write 10 comments on the picture given below. Also write what would you choose and why?



2. Answer the following questions

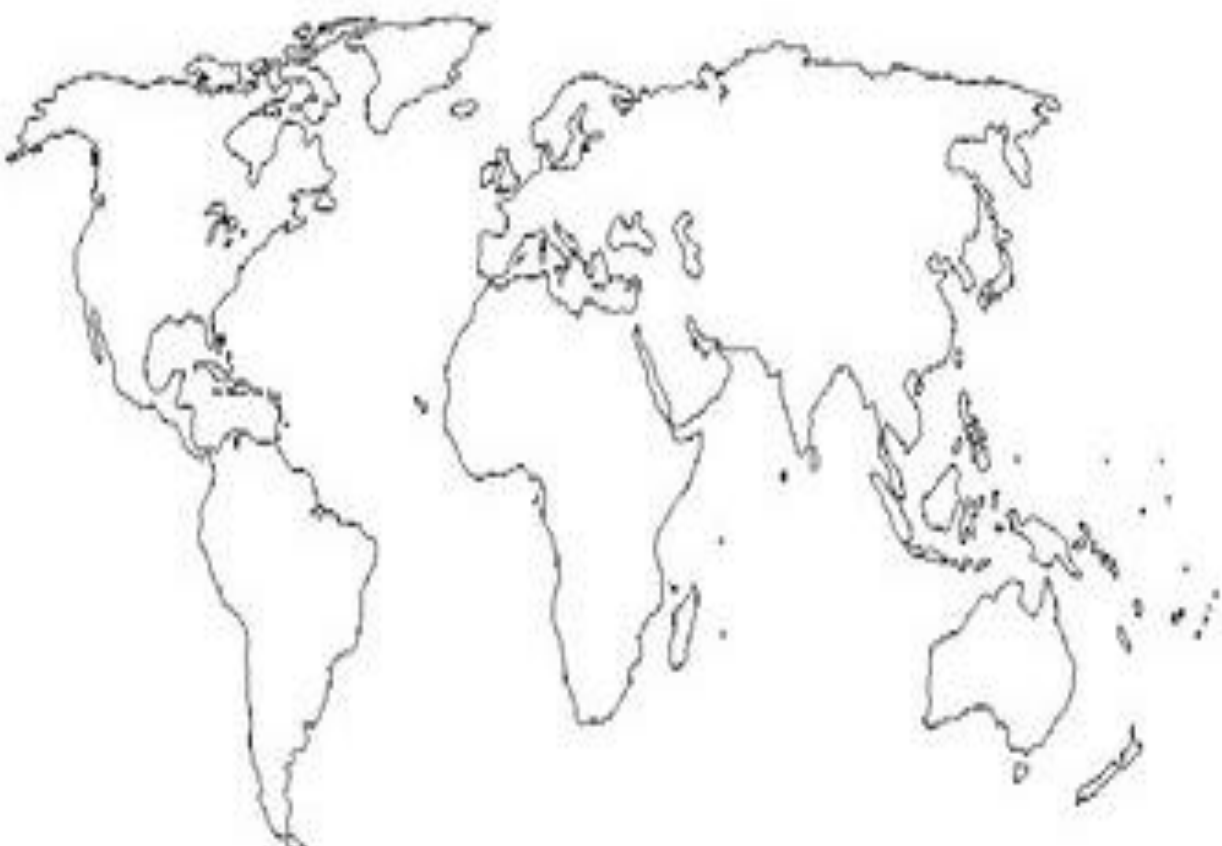
- a. Why we should avoid eating junk food?
- b. What is the role of water in our body?
- c. Case Study: Include case study or real life experiences illustrating the benefits of adopting a balanced diet and consequences of poor dietary choices.



SOCIAL STUDIES



1. Write name of the continents on the map-



2. Answer the following question-

- i. Write the name of the largest and the smallest continent in the world.
- ii. Write an advantage of the Map.
- iii. Who proved that the Earth is not flat?
- iv. What is a linear scale?

3. Write what the following colours represent in a map.

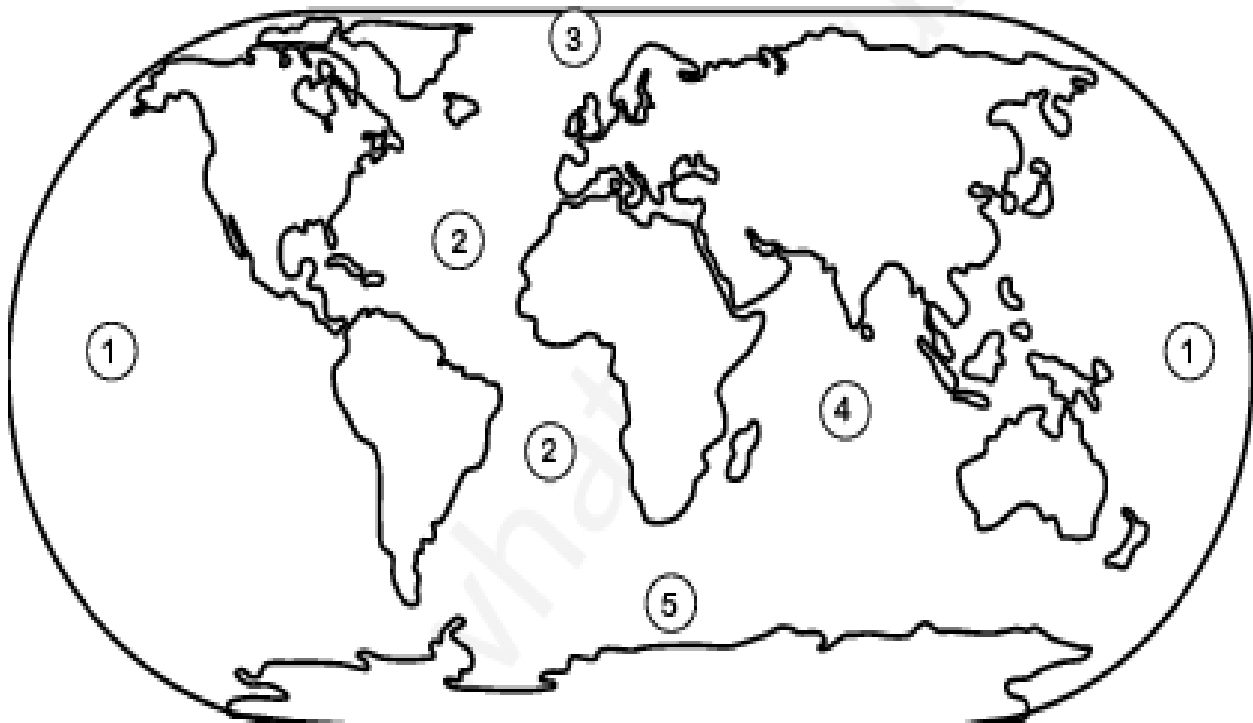
- (a) Light blue -
- (b) Dark blue –
- (c) Green –
- (d) Yellow –
- (e) Dark brown _

4. Write True and False for the statements.

- a) A book of maps is called an atlas.....
- b) A globe is not the model of the Earth.....
- c) Yellow colour is used to represent mountains.....
- d) The Pacific Ocean is the largest and the deepest ocean.....
- e) The Earth is known as Red Planet.....

Ocean

a very large expanse of sea



Write down the ocean names and color the above map.

1

2

3

4

5




Instruction:-Dear students read the assignment properly and complete your assignment in Sanskrit notebook.

- 1- वर्णमालायां लिखत ।(वर्णमाला को DIAGRAM बनाकर लिखें)
- 2- संस्कृत में संख्या को लिख कर याद करें (1-10)

- 1-एकम्
- 2-द्वे
- 3-त्रीणि
- 4-चत्वारि
- 5-पंच
- 6-षट्
- 7-सप्त
- 8-अष्ट
- 9-नव
- 10-दश

MyCursive

Look at the picture and write in cursive.





*If I'd find a higher tree
and farther and farther, I could see*

Handwriting practice lines consisting of 15 sets of four horizontal lines (red, blue, blue, red) for writing.

सुलेख

कश्मीर की घाटी अत्यधिक सुन्दर है।

कश्मीर की घाटी अत्यधिक सुन्दर है।

Blank handwriting practice line.

Blank handwriting practice line.

Blank handwriting practice line.

Blank handwriting practice line.

Blank handwriting practice line.

Blank handwriting practice line.

Blank handwriting practice line.

Blank handwriting practice line.